

# Year 1 Maths Activity Mat

3

## Section 1

I have 2 pairs of shoes.

How many shoes is that altogether?



## Section 4


I have 16p and I lose 5p.

How much money have I got left?



## Section 7

What time is it?



5 o'clock

Half past 6

Half past 5

## Section 2


Shep had 3 dog biscuits.

Rover had 4. How many more biscuits did Rover have?



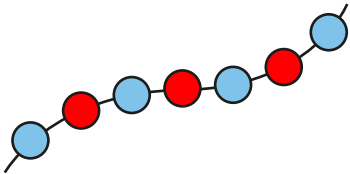
## Section 5

Cut the cake in half.



## Section 3

Count the beads and write the number.



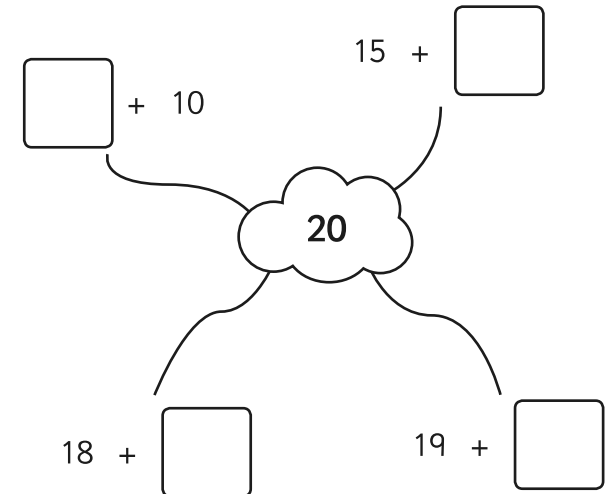
## Section 6

What numbers are missing?

9	8	7	6			3		1
---	---	---	---	--	--	---	--	---

## Section 8

Complete the number pairs:



# Year 1 Maths Activity Mat: 3

## Answers

### Section 1

I have 2 pairs of shoes.

How many shoes is that altogether?



4

### Section 4

I have 16p and I lose 5p.


How much money have I got left?



11p

### Section 7

What time is it?



5 o'clock

Half past 6

Half past 5

### Section 2

Shep had 3 dog biscuits.

Rover had 4. How many more biscuits did Rover have?

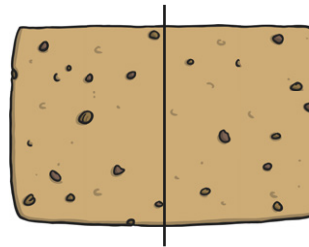


1

### Section 5

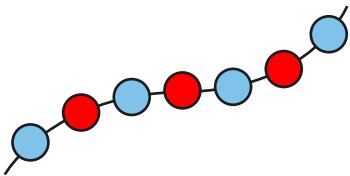
Cut the cake in half.

For example:



### Section 3

Count the beads and write the number.



7

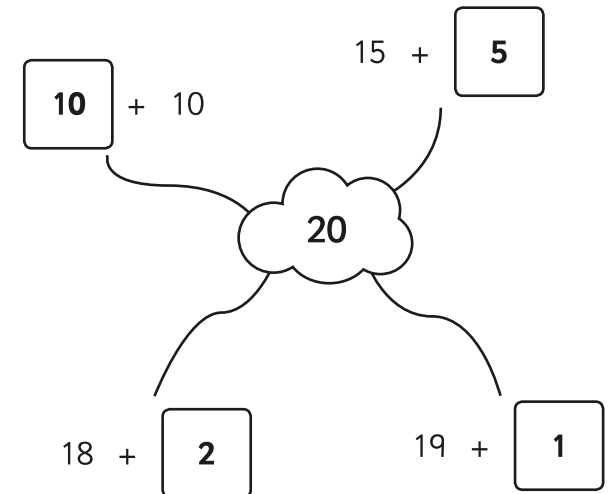
### Section 6

What numbers are missing?

9	8	7	6	5	4	3	2	1
---	---	---	---	---	---	---	---	---

### Section 8

Complete the number pairs:



# Year 1 Maths Activity Mat

3

## Section 1

I have 3 pairs of shoes.

How many shoes is that altogether?



## Section 2

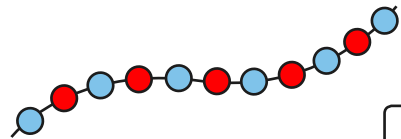
Shep had 3 dog biscuits.

Rover had 5. How many more biscuits did Rover have?



## Section 3

Count the beads and write the number.



## Section 4


I lose 5p from the money pictured below.

How much money have I got left?



## Section 5

Cut the cake into quarters.



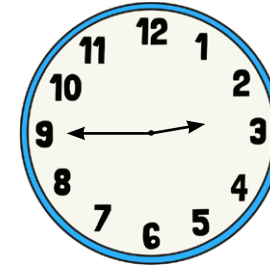
## Section 6

What numbers are missing?

10	8	6			0
----	---	---	--	--	---

## Section 7

What time is it?



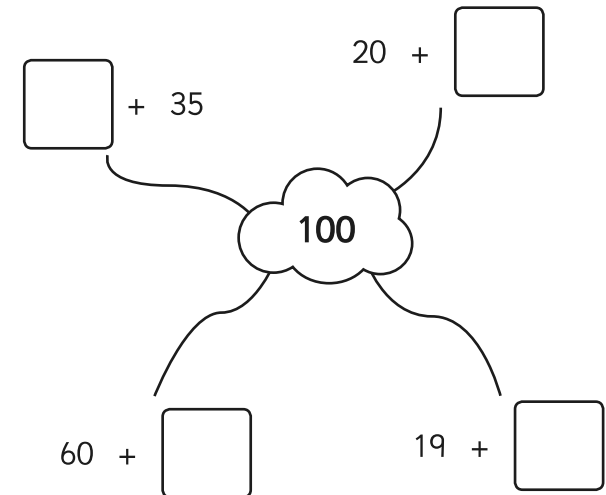
3 o'clock

quarter past 7

quarter to 3

## Section 8

Complete the number pairs:



# Year 1 Maths Activity Mat: 3

## Answers

### Section 1

I have 3 pairs of shoes.

How many shoes is that altogether?



6

### Section 4

I lose 5p from the money pictured below.

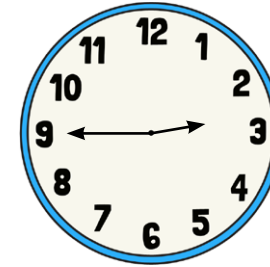
How much money have I got left?



26p

### Section 7

What time is it?



3 o'clock

quarter past 7

quarter to 3

### Section 2

Shep had 3 dog biscuits.

Rover had 5. How many more biscuits did Rover have?

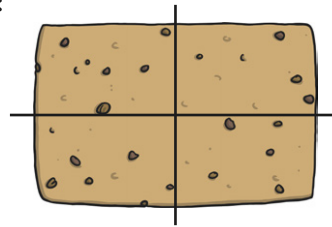


2

### Section 5

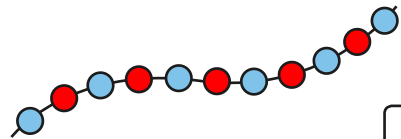
Cut the cake into quarters.

For example:



### Section 3

Count the beads and write the number.



11

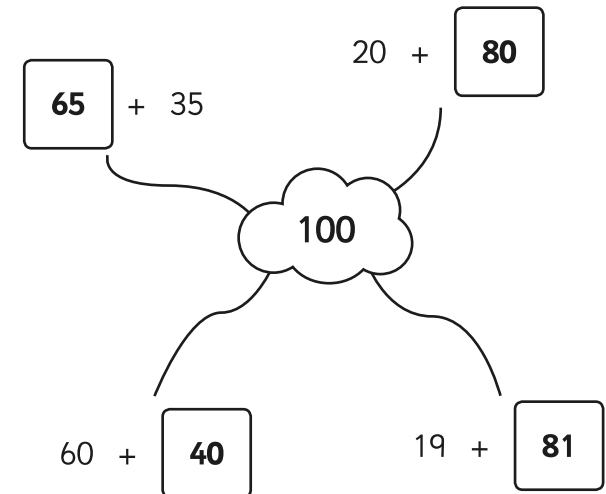
### Section 6

What numbers are missing?

10	8	6	4	2	0
----	---	---	---	---	---

### Section 8

Complete the number pairs:



# Year 1 Maths Activity Mat

3

## Section 1

I have 5 pairs of shoes.

How many shoes is that altogether?



## Section 2

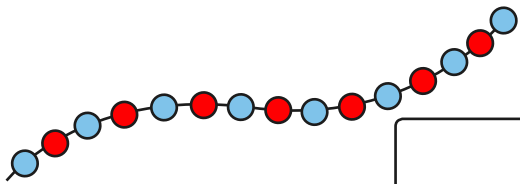
Shep had 5 dog biscuits.

Rover had 8. How many more biscuits did Rover have?



## Section 3

Count the beads and write the number.




## Section 4

I have got 30p.


I lose 5p.

Write this as a number sentence:



## Section 5

Cut the cake into quarters.



How many quarters equal a half?


## Section 6

What numbers are missing?

40	35	30		20			5	0
----	----	----	--	----	--	--	---	---

## Section 7

What time is it?



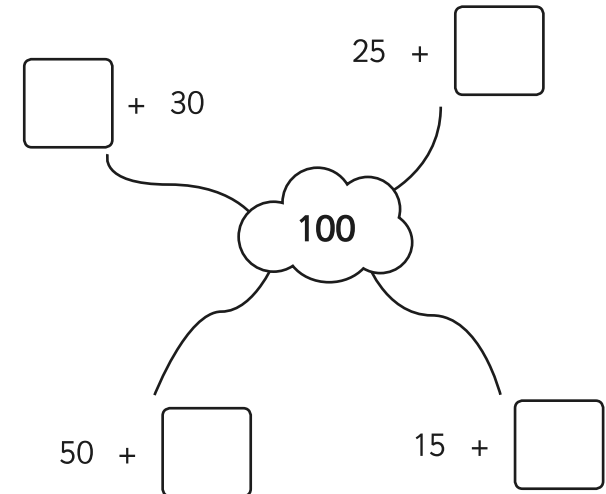
half past 5

ten to 6

ten to 5

## Section 8

Complete the number pairs:



# Year 1 Maths Activity Mat: 3

## Answers

### Section 1

I have 5 pairs of shoes.

How many shoes is that altogether?




10

### Section 4

I have got 30p.

I lose 5p.


Write this as a number sentence:



$$30 - 5 = 25$$

### Section 7

What time is it?



half past 5

ten to 6

ten to 5

### Section 2

Shep had 5 dog biscuits.

Rover had 8. How many more biscuits did Rover have?

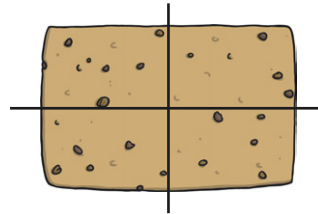


3

### Section 5

Cut the cake into quarters.

For example:

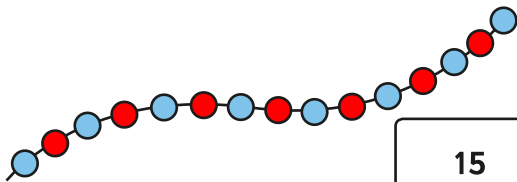


How many quarters equal a half?

2

### Section 3

Count the beads and write the number.



15

### Section 6

What numbers are missing?

40	35	30	25	20	15	10	5	0
----	----	----	----	----	----	----	---	---

### Section 8

Complete the number pairs:

