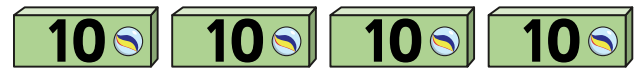


Add and subtract 10s

1 a) Eva has some marbles.



How many marbles does Eva have?

Eva has marbles.

She buys 3 more boxes of marbles.

How many marbles does she have now?

b) Teddy has some marbles.



How many marbles does Teddy have?

Teddy has marbles.

He gives 5 boxes of marbles to his friend.

How many marbles does he have now?

2 What calculation is represented?
Complete the number sentence.

	Tens	Ones
+		

		T	O	
		2	4	
	+	1	0	
		3	4	

$$\square + \square = \square$$

3 Use base 10 to complete the calculations.

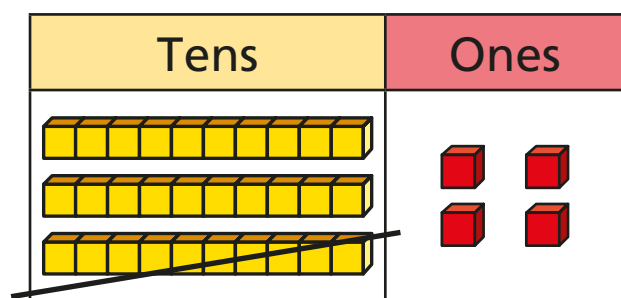
a) $24 + 20 = \square$

b) $17 + 50 = \square$

c) $40 + 16 = \square$



- 4 What calculation is represented?
Complete the number sentence.



		T	O	
		3	4	
		-	1	0
		<hr/>		
		2	4	

$$\square - \square = \square$$

- 5 Use base 10 to complete the calculations.

a) $34 - 20 = \square$

b) $57 - 20 = \square$

c) $46 - 40 = \square$


- 6 Huan has 6 stickers.



He gets 10 new stickers every day for 8 days.

How many stickers will Huan have after 8 days?

Use the number track to help you.



Huan will have stickers.

- 7 = 30 = 10 = 40

Complete the calculations.

a) + =

b) - =

c) - =