



THIRD SPACE
LEARNING

Fluent in Five

Questions and Answers

Year 2

Week 3

Year 2 – Week 3

This week in a nutshell:

As this is now the third week of Fluent in Five in Year 2, children should be familiar with the worksheet structure and layout, and therefore it is expected that most children will now be completing all 3 questions within the 5 minutes given.

This is the first week in which new Year 2 content is being introduced. This week, as well as re-capping learning from Year 1, questions focus on adding/subtracting a two-digit number and ones or a two-digit number and ten.

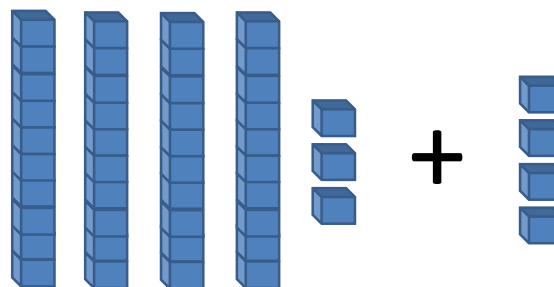


THIRD SPACE
LEARNING

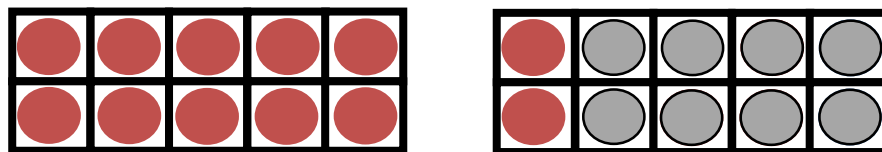
Year 2

Week 3 – Day 1

$$A. 43 + 4 =$$



$$B. 20 - 8 =$$



$$C. 10 - ? = 0$$



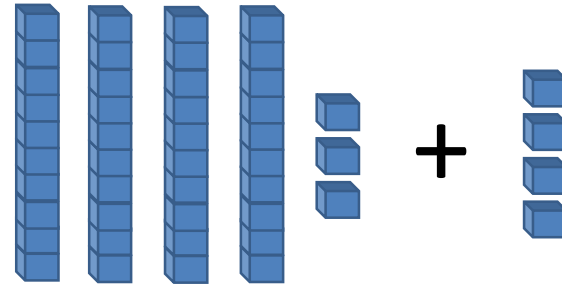


Year 2

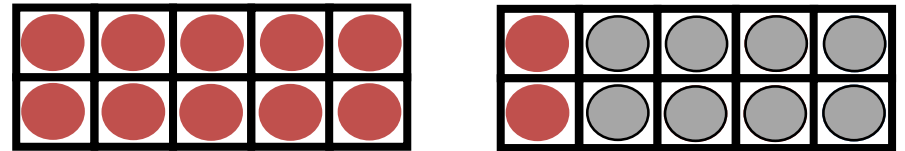
Week 3 – Day 1 (Answers)

THIRD SPACE
LEARNING


$$A. 43 + 4 = 47$$



$$B. 20 - 8 = 12$$



$$C. 10 - 10 = 0$$





THIRD SPACE
LEARNING

Fluent in Five

Questions and Answers

Week 3

Day 2



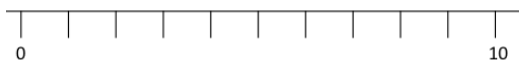
Year 2

Week 3 – Day 2

THIRD SPACE
LEARNING

$$A. 34 - 3 =$$

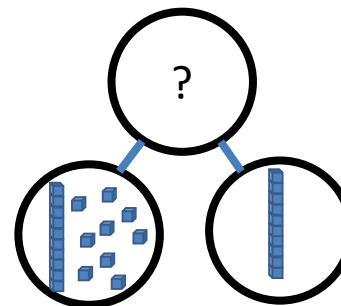
Use...




A number line

...to help you

$$B. 19 + 10 =$$



$$C. 4 \text{ lots of } 2 =$$





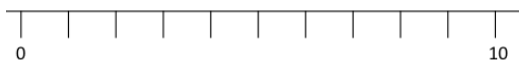
Year 2

Week 3 – Day 2 (Answers)

THIRD SPACE
LEARNING

$$A. 34 - 3 = 31$$

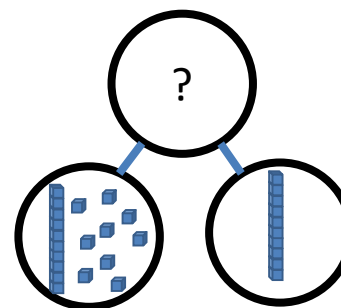
Use...




A number line

...to help you

$$B. 19 + 10 = 29$$



$$C. 4 \text{ lots of } 2 = 8$$





THIRD SPACE
LEARNING

Fluent in Five

Questions and Answers

Week 3

Day 3

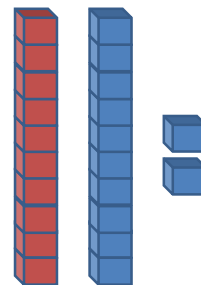


Year 2

Week 3 – Day 3

THIRD SPACE
LEARNING

$$A. 22 - 10 =$$



$$B. \text{Half of } 6 =$$



$$C. 37 - 6 =$$

You choose...

...what to use...

...to help you

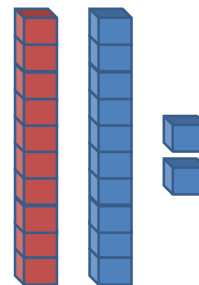


THIRD SPACE
LEARNING

Year 2

Week 3 – Day 3 (Answers)

$$A. 22 - 10 = 12$$



$$B. \text{Half of } 6 = 3$$



$$C. 37 - 6 = 31$$

You choose...

...what to use...

...to help you



THIRD SPACE
LEARNING

Fluent in Five

Questions and Answers

Week 3

Day 4

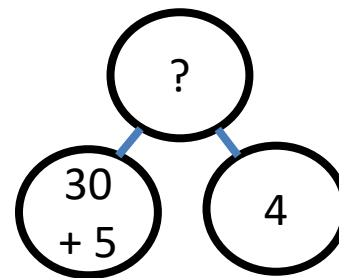


Year 2

Week 3 – Day 4

THIRD SPACE
LEARNING

A. $35 + 4 =$




Use...



B. $44 - 10 =$

...to help you

C. Double 2 =



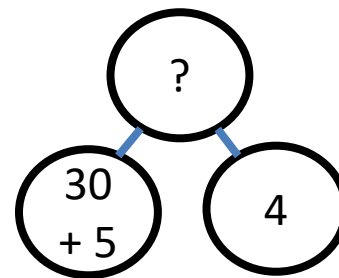


Year 2

Week 3 – Day 4 (Answers)

THIRD SPACE
LEARNING

$$A. 35 + 4 = 39$$




Use...



$$B. 44 - 10 = 34$$

...to help you

$$C. \text{Double } 2 = 4$$





THIRD SPACE
LEARNING

Fluent in Five

Questions and Answers

Week 3

Day 5




Year 2

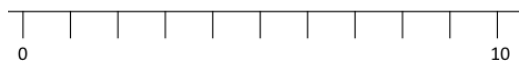
Week 3 – Day 5

THIRD SPACE
LEARNING

$$A. 55 + 10 =$$



Use...

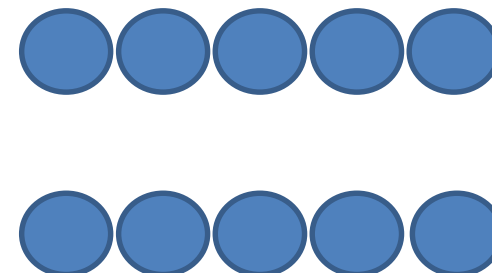


$$B. 68 - 6 =$$

A number line

...to help you

$$C. 10 \text{ shared between } 2 =$$






THIRD SPACE
LEARNING

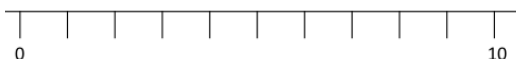
Year 2

Week 3 – Day 5 (Answers)

$$A. 55 + 10 = 65$$



Use...



$$B. 68 - 6 = 62$$

A number line

...to help you

$$C. 10 \text{ shared between } 2 = 5$$

